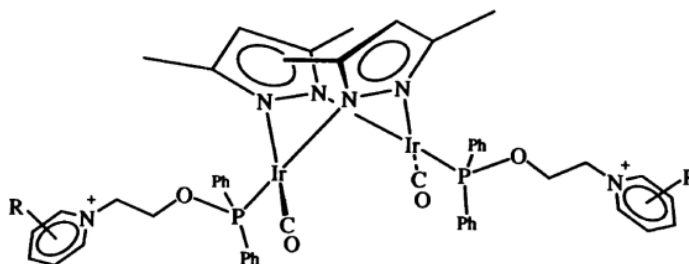


Problem Set 9

Ch 153a – Winter 2024

Due: 4 March, 2024

1. Fox and coworkers (*Science* **1990**, *247*, 1069-1071) reported the kinetics of electron transfer in a series of Ir dimers of the following type:



A plot of the driving force dependence of the rates and a data table are show.

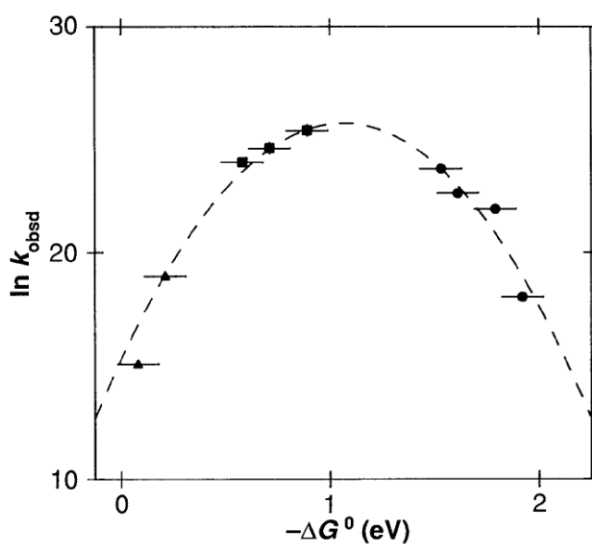


Table 2. Driving forces and rate constants for ET. Standard errors are 0.1 eV for $-\Delta G^\circ$ and $\pm 10\%$ for k_{ET} , except where noted.

Donor	Acceptor	$-\Delta G^\circ$ (eV)	k_{ET} (s^{-1})
$^3\text{Ir}_2^*$	2,4,6-Me ₃ py ⁺	0.08	3.5×10^6
$^3\text{Ir}_2^*$	4-Mepy ⁺	0.21	1.7×10^8
$^1\text{Ir}_2^*$	2,4,6-Me ₃ py ⁺	0.58	2.7×10^{10}
$^1\text{Ir}_2^*$	4-Mepy ⁺	0.71	$5.0 \times 10^{10*}$
$^1\text{Ir}_2^*$	py ⁺	0.89	1.1×10^{11}
$^1\text{Ir}_2^*$	4-Phpy ⁺	0.97	$>1.1 \times 10^{11}$
4-Phpy [•]	Ir ₂ ⁺	1.53	2.0×10^{10}
4-Mepy [•]	Ir ₂ ⁺	1.61	6.7×10^9
py [•]	Ir ₂ ⁺	1.79	3.3×10^9
2,4,6-Me ₃ py [•]	Ir ₂ ⁺	1.92	6.7×10^7

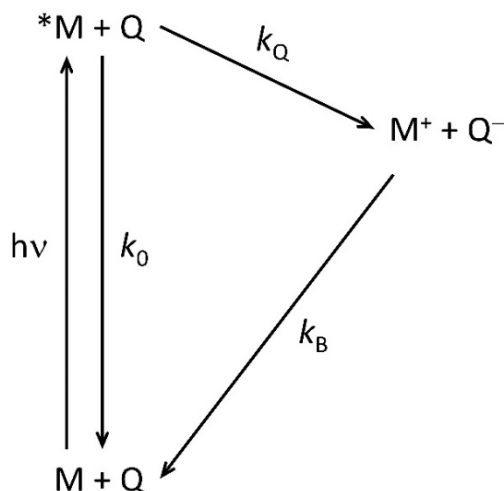
* $\pm 30\%$.

Semiclassical electron-transfer theory predicts that intramolecular rates can be described by the following equation:

$$k_{ET} = \sqrt{\frac{4\pi^3}{h^2\lambda RT}} H_{AB}^2 \exp\left\{-\frac{(\Delta G^\circ + \lambda)^2}{4\lambda RT}\right\}$$

On the basis of the electron transfer rate data, what is the value of H_{AB} for this series of complexes? Predict the positions, extinction coefficients, and widths of the $\text{Ir} \rightarrow (\text{R-py})^+$ charge transfer absorption bands for the four Ir compounds used in this study.

2. Photoinduced electron-transfer reactions that are relevant to photoredox catalysis are depicted in the following scheme:



Assume that immediately after excitation by a pulsed laser the concentration of the excited metal complex is $[*M]_0$ and that $[*M]_0 \ll [Q]$ for all quencher concentrations under consideration. In the absence of quencher $*M$ decays back to M with rate constant k_0 , and $*M$ reacts with the quencher with a rate constant k_Q .

- Derive a rate law for the time dependence of $[*M]$.
- Solve the rate law to give an expression describing the time dependence of $[*M]$.
- Derive an expression for the quantum yield of Q^- formation.
- Assume that k_0 can take on the values: $1 \times 10^9 \text{ s}^{-1}$; $1 \times 10^8 \text{ s}^{-1}$; $1 \times 10^7 \text{ s}^{-1}$; $1 \times 10^6 \text{ s}^{-1}$. Assume also that k_Q can take on the values: $1 \times 10^9 \text{ M}^{-1}\text{s}^{-1}$; $1 \times 10^8 \text{ M}^{-1}\text{s}^{-1}$; $1 \times 10^7 \text{ M}^{-1}\text{s}^{-1}$. Find the quencher concentration required to give 90% quantum yield of $[Q^-]$ for all twelve pairs of k_0 and k_Q rate constants.
- If the quenching reaction yields a product concentration of $[Q^-]_\infty$, derive an expression for the half-time of the reaction to regenerate M and Q .